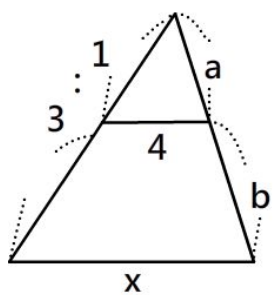


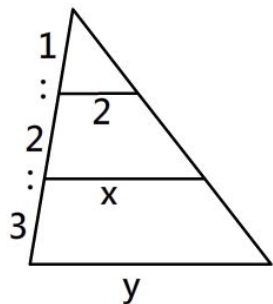
1-3 隨堂測驗 每格 10 分，共 100 分

9 年\_\_班\_\_號 姓名\_\_\_\_\_

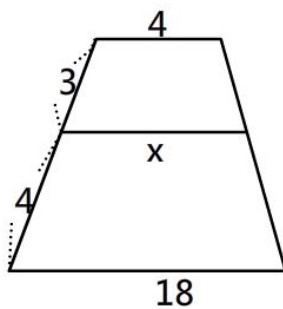
已下題目中，上下直線都是平行線



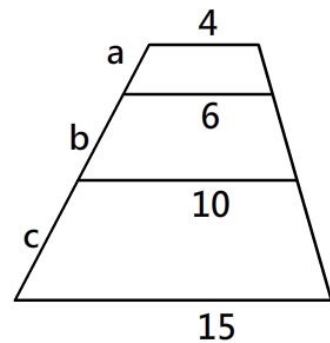
- (1)  $a:b=$   
(2)  $x=$



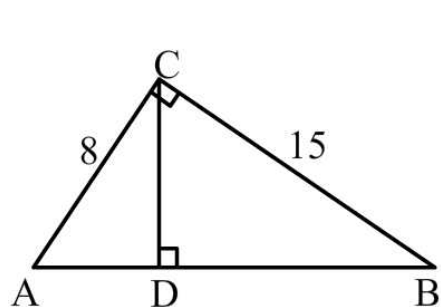
- (1)  $x=$   
(2)  $y=$



- (1)  $x=$



- (1)  $a:b:c=$

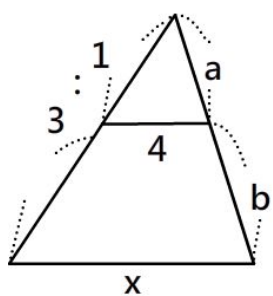


- AB=  
CD=  
AD=  
BD=

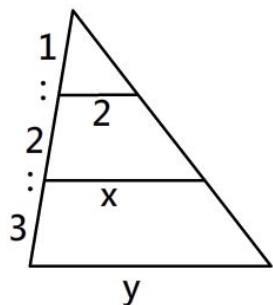
1-3 隨堂測驗 每格 10 分，共 100 分

9 年\_\_班\_\_號 姓名\_\_\_\_\_

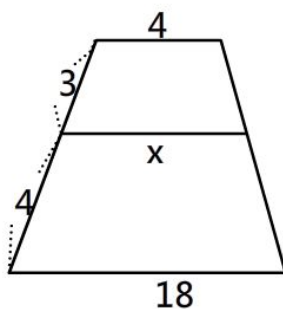
已下題目中，上下直線都是平行線



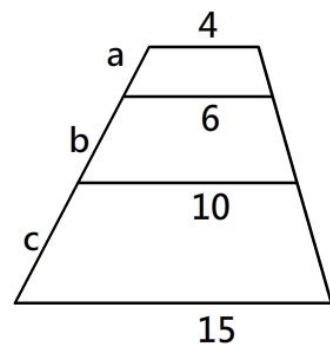
- (3)  $a:b=$   
(4)  $x=$



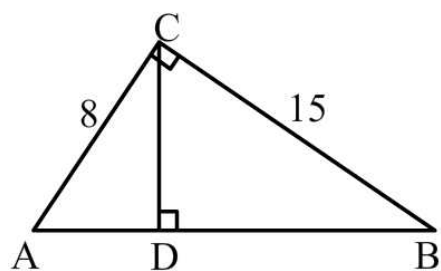
- (1)  $x=$   
(2)  $y=$



- (1)  $x=$



- (1)  $a:b:c=$



- AB=  
CD=  
AD=  
BD=