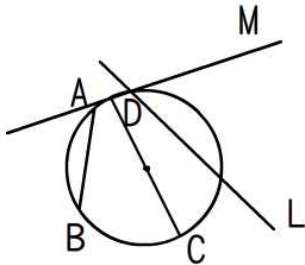
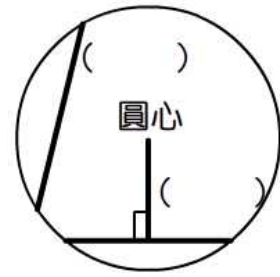
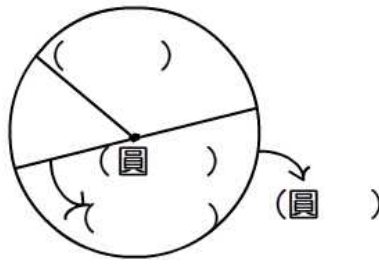
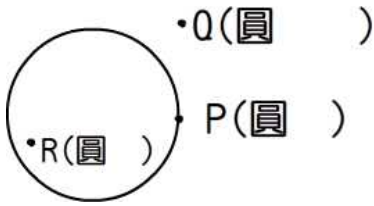
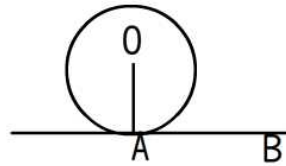


有關圓的基本名詞

P、Q、R 的位置在那裏？



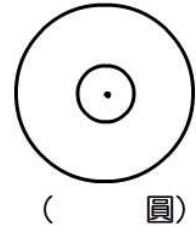
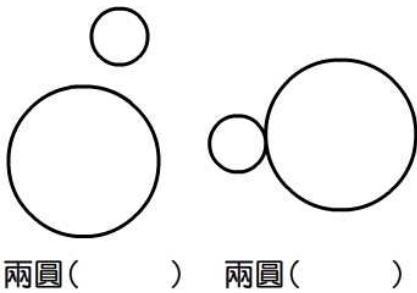
M: \_\_\_\_\_ 線  
L: \_\_\_\_\_ 線  
AB: \_\_\_\_\_  
CD: \_\_\_\_\_



AB 為切線，O 為圓心  
求  $\angle OAB =$  \_\_\_\_\_

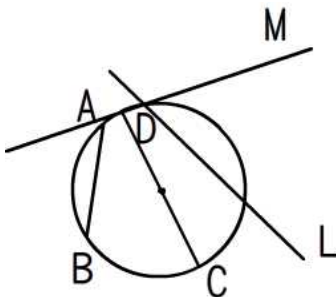
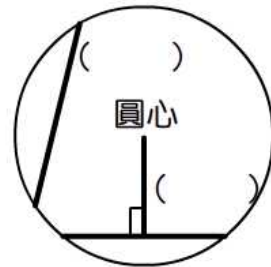
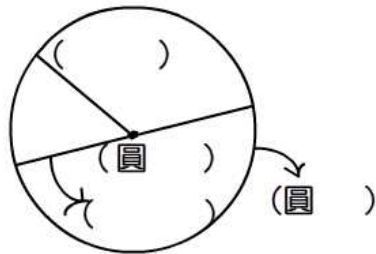
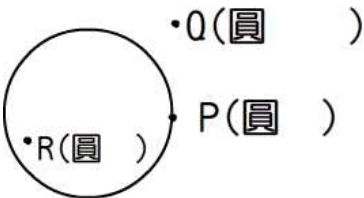
如左圖，若  $OA=6, OB=10$

求  $AB =$  \_\_\_\_\_

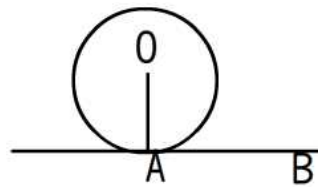


有關圓的基本名詞

P、Q、R 的位置在那裏？



M: \_\_\_\_\_ 線  
L: \_\_\_\_\_ 線  
AB: \_\_\_\_\_  
CD: \_\_\_\_\_



AB 為切線，O 為圓心  
求  $\angle OAB =$  \_\_\_\_\_

如左圖，若  $OA=6, OB=10$

求  $AB =$  \_\_\_\_\_

