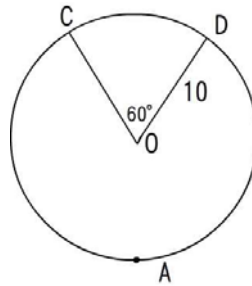
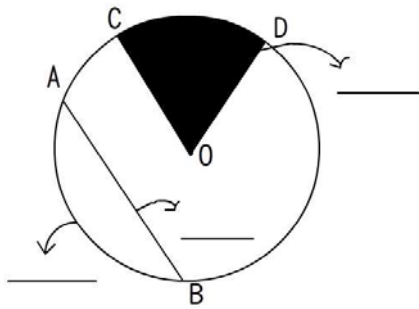


◆與圓有關的名詞



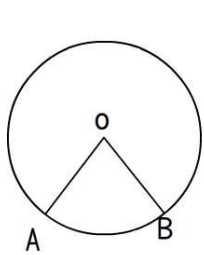
\widehat{CD} 長度=

\widehat{CD} 度數=

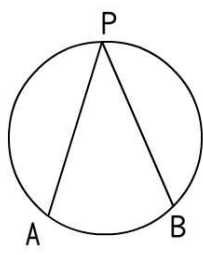
扇形 COD 面積=

扇形 COD 周長=

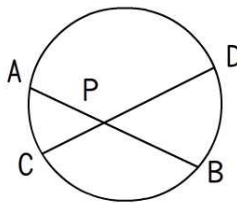
◆圓中各種角的基本名詞



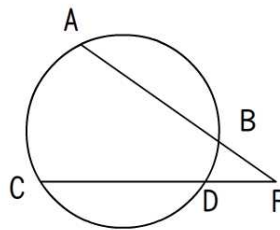
$\angle AOB$ 叫
——角



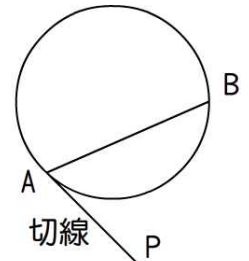
$\angle APB$ 叫
——角



$\angle APC$ 叫
——角



$\angle APC$ 叫
——角



$\angle BAP$ 叫
——角

◆圓內各角度與弧的度數大小之對應關係

圓心角

弧度數大小

圓周角

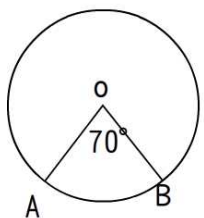


圓內角

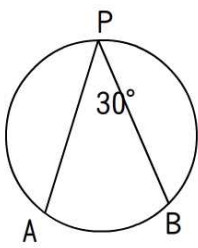
圓外角

弦切角

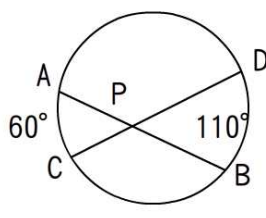
◆練習題



$\widehat{AB} =$

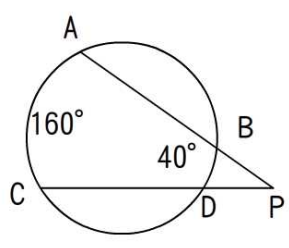


$\widehat{AB} =$

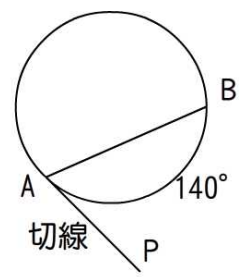


$\angle APC =$

$\angle APD =$



$\angle P =$



$\angle BAP =$